

CHAPTER NINE | KNOWLEDGE EXAM SAMPLE QUESTIONS

LEARNER'S PERMIT AND DRIVER'S LICENSE

SAMPLE EXAM QUESTIONS

There are two components to the practice knowledge examination for the Learner's Permit or Driver's License Exam. The first tests your knowledge of common signs you may encounter on the knowledge exam. The signs are found in Chapter 6 of the Driver's Manual. The second component will test your knowledge of traffic rules and laws you may encounter on the knowledge exam. The traffic rules and laws are found in Chapters 6, 7, and 8 of the Driver's Manual. On the actual knowledge examination, you must have 80% or higher correct on each component to pass the exam.

Sign Questions


1. The shape of this sign indicates:

- Information
- Stop
- Warning
- Yield Right of Way




2. The shape of this sign indicates:

- Curve Ahead
- Railroad Crossing
- Regulatory
- School Zone



3. The shape of this sign indicates:

- No Passing Zone
- School Zone
- Wait for Signal
- Yield



4. This sign indicates:

- Children at Play
- Flagger Ahead
- Pedestrian Crossing
- School Zone




5. This sign indicates:

- Detour Ahead
- Divided Highway
- Merging Traffic
- Lane Ends



6. The shape of this sign indicates:

- Detour
- Railroad Crossing
- Road Work Ahead
- Intersection



Traffic Questions

1. A legal left turn at a red light may be made when?
 - a. Another driver sounds their horn
 - b. Never
 - c. The driver is turning from a one-way street onto another one-way street
 - d. There are no other vehicles

2. When a law enforcement officer is directing traffic, but the officer's command is different from a traffic signal or sign, you should?
 - a. Continue on without reducing speed
 - b. Obey the command of the officer
 - c. Obey the traffic signal
 - d. Submit an alert on social media

3. A tractor-trailer takes longer to stop than a car traveling at the same speed. Which of the following statements is the most accurate for a fully loaded tractor-trailer with hot brakes traveling at fifty-five (55) mph?
 - a. The tractor-trailer may take 50 feet or more to stop
 - b. The tractor-trailer may take 100 feet or more to stop
 - c. The tractor-trailer may take 200 feet or more to stop
 - d. The tractor-trailer may take 400 feet or more to stop

4. According to Indiana law, during what period of time must a vehicle have its headlights turned on?
 - a. Between sunset and sunrise, visibility is less than 500 ft.
 - b. Most of the time
 - c. 6:30 p.m. to 6:30 a.m.
 - d. When the driver is tired

5. If the road you will be turning from has more than one lane, which lane should you turn from?
 - a. It doesn't matter
 - b. Turn from the lane nearest to the direction you will be turning
 - c. Turn from the middle lane
 - d. Turn from the lane farthest to the direction you will be turning

6. Unless otherwise posted, the speed limit on a rural state divided highway is?
 - a. 50 miles per hour
 - b. 55 miles per hour
 - c. 60 miles per hour
 - d. 65 miles per hour

7. Unless otherwise posted, the maximum speed limit for a passenger vehicle on an interstate located outside of an urbanized area is?
 - a. 50 miles per hour
 - b. 55 miles per hour
 - c. 60 miles per hour
 - d. 70 miles per hour

8. When driving at night, low beam headlights must be used when following a vehicle within?
 - a. 50 feet
 - b. 100 feet
 - c. 200 feet
 - d. 300 feet

9. When driving at night, lower headlight beams must be used when approaching oncoming traffic within?
 - a. 100 feet
 - b. 200 feet
 - c. 300 feet
 - d. 500 feet

10. In a situation with a flat tire or tire blowout, you should?
 - a. Continue driving on the rim until the destination is reached
 - b. Hold the steering wheel firmly and keep the car going straight
 - c. Increase your driving speed
 - d. Apply the brakes right away

STUDY ON YOUTUBE!

Study for your driver's exam using the
 BMV YouTube channel!



[YOUTUBE.COM/@INBMV](https://www.youtube.com/@INBMV)



Scan and play all or find a
 specific Knowledge Exam
 video to watch.

Watch all videos in the playlist as a supplement to the Indiana
 Driver's Manual to better prepare yourself for your exam!

SIGN PRACTICE EXAM ANSWERS: 1. C 2. C 3. A 4. B 5. D 6. B
 TRAFFIC PRACTICE EXAM ANSWERS: 1. C 2. B 3. D 4. A 5. B 6. C 7. D 8. C
 9. D 10. B

FOR-HIRE ENDORSEMENT SAMPLE EXAM QUESTIONS

This exam consists of 25 questions, of which you can only miss five in order to pass.

1. If you are transporting property for hire with a for-hire endorsement, what is the vehicle's gross vehicle weight limit?
 - a. The vehicle's gross weight must not exceed twenty-six thousand (26,000) pounds
 - b. The vehicle's gross weight must not exceed sixteen thousand (16,000) pounds
 - c. The vehicle's gross weight must exceed twenty-six thousand (26,000) pounds
 - d. The vehicle's gross weight must exceed twenty-eight thousand (28,000) pounds

2. Vehicles carrying passengers for hire are required to stop at railroad crossings. These vehicles must stop within how many feet of the railroad tracks?
 - a. 5 to 45 feet
 - b. 10 to 40 feet
 - c. 15 to 50 feet
 - d. 20 to 60 feet

3. What is the maximum width of any vehicle that may be operated without a special permit?
 - a. 8 feet, 6 inches
 - b. 7 feet, 8 inches
 - c. 10 feet, 9 inches
 - d. 13 feet, 6 inches

4. Which of the following are acceptable warning devices for a truck, bus, or tractor-trailer that is disabled on a traveled roadway or its shoulder?
 - a. Three (3) federally conforming, bi-directional emergency reflective triangles
 - b. Three (3) liquid-burning flares
 - c. All answers are correct
 - d. At least six (6) fuses

MOTOR DRIVEN CYCLE ENDORSEMENT SAMPLE EXAM QUESTIONS

This exam consists of 25 questions, of which you can only miss five in order to pass.

1. When approaching a railroad crossing sign, you should:
 - a. Pass any vehicles that may cause you to stop
 - b. Speed up to cross the tracks before the signal changes
 - c. Be prepared to stop
 - d. Listen for the train's horn, as it must always be sounded near intersections

2. When approaching a stop sign you must:
 - a. Come to a complete stop before the white line, crosswalk or intersection
 - b. Continue on without reducing speed
 - c. Come to a complete stop only if other traffic is approaching
 - d. Yield the right of way to the vehicles on the left

3. Drivers approaching an intersection with a non-operating traffic signal should:
 - a. Stop and then proceed with caution
 - b. Ignore the signal
 - c. Continue on without reducing speed
 - d. Stop and wait for the traffic signal to turn green

4. When a law enforcement officer is directing traffic, but the officer's command is different from a traffic signal or sign, you should:
 - a. Continue on without reducing speed
 - b. Obey the command of the officer
 - c. Obey the traffic sign or signal
 - d. Submit an alert on social media